



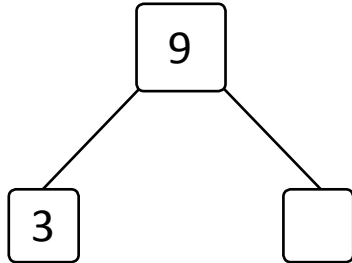
NAME _____

DATE _____

SUBTRACTIONS

Write the subtraction sentences by using number bonds or using images.

a) $9 - 3 = \underline{\quad}$



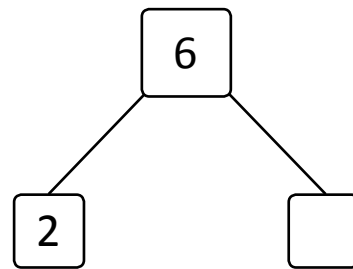
e) $10 - 3 = \underline{\quad}$



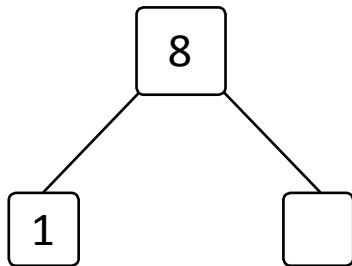
b) $5 - 2 = \underline{\quad}$



f) $6 - 2 = \underline{\quad}$



c) $8 - 1 = \underline{\quad}$



g) $9 - 2 = \underline{\quad}$



d) $4 - 3 = \underline{\quad}$



h) $8 - 3 = \underline{\quad}$

